




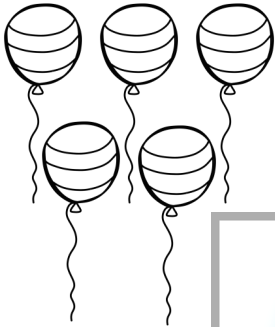


Greater Than 1 - 10

Name \_\_\_\_\_

# St Patrick's Day

Count the two different objects in each set.  
Circle the group of objects that is greater.



**A WELLSPRING  
OF WORKSHEETS**

**FREE PREVIEW**

**Please Login or Become a Member to download  
the printable version of this worksheet.**

