


# Counting 1 - 20

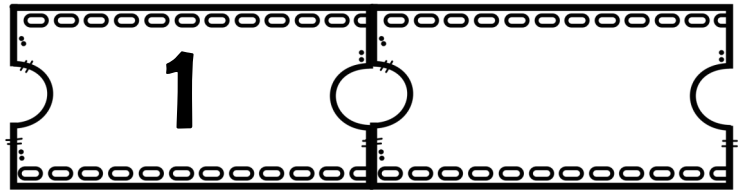

Name \_\_\_\_\_



# Leprechaun Family Vacation



This leprechaun is buying train tickets for his family to go on a vacation. Count how many tickets he bought by writing the numbers on the tickets. How many family members are going on the trip?



**A WELLSPRING OF WORKSHEETS**

**FREE PREVIEW**

Please Login or Become a Member to download the printable version of this worksheet.

