







**Telling Time to the Hour #6 - 9 Round Clocks**

Write the time on the clock faces on the lines.

**FREE PREVIEW****Please Login or Become a Member to download  
the printable version of this worksheet.**







\_\_\_\_ : 00

\_\_\_\_ : 00

\_\_\_\_ : 00

**Telling Time to the Hour #6 - 9 Round Clocks** **Answer Sheet**

Write the time on the clock faces on the lines.

**FREE PREVIEW****Please Login or Become a Member to download  
the printable version of this worksheet.**9 : 0012 : 003 : 00