





## Telling Time to the Hour #5 - 16 Square Clocks





Write the time on the clock faces on the lines.



**A WELLSPRING**  
OF WORKSHEETS

**FREE PREVIEW**

**Please Login or Become a Member to download the printable version of this worksheet.**



\_\_\_\_\_


\_\_\_\_\_

\_\_\_\_\_


\_\_\_\_\_

## Telling Time to the Hour #5 - 16 Square Clocks **Answer Sheet**


Write the time on the clock faces on the lines.




6:00



3:00



1:00



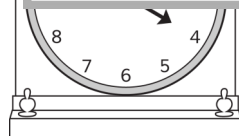
10:00



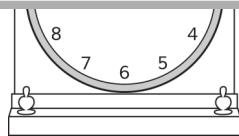
**A WELLSPRING**  
OF WORKSHEETS

**FREE PREVIEW**


**Please Login or Become a Member to download  
the printable version of this worksheet.**



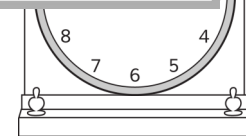
4:00




1:00




7:00




11:00




8:00



9:00



6:00



2:00