




**Telling Time to the Hour #4 - 9 Round Clocks**




Write the time on the clock faces on the lines.



**A WELLSPRING**  
**OF WORKSHEETS**

**FREE PREVIEW**

**Please Login or Become a Member to download  
the printable version of this worksheet.**









\_\_\_\_ :00

\_\_\_\_ :00

\_\_\_\_ :00

**Telling Time to the Hour #4 - 9 Round Clocks** **Answer Sheet**

Write the time on the clock faces on the lines.

**FREE PREVIEW****Please Login or Become a Member to download  
the printable version of this worksheet.**4 : 005 : 001 : 00