





## Telling Time to the Hour #4 - 16 Square Clocks





Write the time on the clock faces on the lines.



**A WELLSPRING**  
OF WORKSHEETS


**FREE PREVIEW**

**Please Login or Become a Member to download  
the printable version of this worksheet.**




**Telling Time to the Hour #4 - 16 Square Clocks Answer Sheet**


Write the time on the clock faces on the lines.




5:00



8:00



4:00



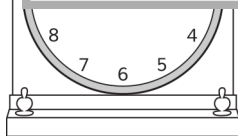
6:00



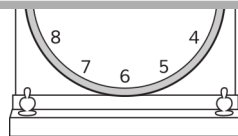
**A WELLSPRING**  
OF WORKSHEETS

**FREE PREVIEW**

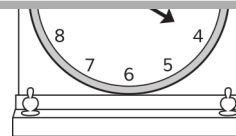
**Please Login or Become a Member to download  
the printable version of this worksheet.**




2:00




10:00




4:00




9:00




11:00



5:00



3:00



1:00