






**Telling Time to the Half Hour #1 - 9 Round Clocks**


Write the time on the clock faces on the lines.

**FREE PREVIEW****Please Login or Become a Member to download  
the printable version of this worksheet.**

\_\_\_\_ : \_\_\_\_






\_\_\_\_ : \_\_\_\_



\_\_\_\_ : \_\_\_\_

## Telling Time to the Half Hour #1 - 9 Round Clocks




Write the time on the clock faces on the lines. **Answer Sheet**



**A WELLSPRING**  
OF WORKSHEETS

**FREE PREVIEW**

**Please Login or Become a Member to download  
the printable version of this worksheet.**



9 : 30

3 : 30

2 : 30