








Making 10 Using Tally Marks - Second Addend










Add the number of tally marks needed to make 10. Write the number to complete the equation.

| | |
|--|--|
|  $3 + \underline{\quad} = 10$ |  $5 + \underline{\quad} = 10$ |
|  <p>A WELLSPRING OF WORKSHEETS</p> <p>FREE PREVIEW</p> <p>Please Login or Become a Member to download the printable version of this worksheet.</p> | |
|  $2 + \underline{\quad} = 10$ |  $7 + \underline{\quad} = 10$ |
|  $1 + \underline{\quad} = 10$ |  $8 + \underline{\quad} = 10$ |

Making 10 Using Tally Marks - Second Addend


Add the number of tally marks needed to make 10. Write the number to complete the equation.

| | |
|--|--|
|  $3 + 7 = 10$ |  $6 + 4 = 10$ |
|  A WELLSPRING OF WORKSHEETS FREE PREVIEW Please Login or Become a Member to download the printable version of this worksheet. | |
|  $2 + 8 = 10$ |  $7 + 3 = 10$ |
|  $1 + 9 = 10$ |  $8 + 2 = 10$ |