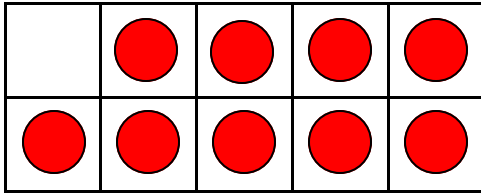
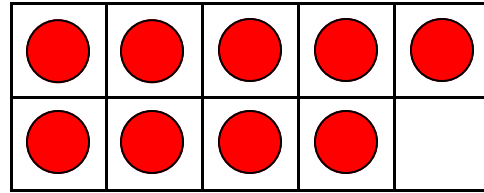


Make Ten Using Ten Frames - Opposite Addends #1

Add circles to make ten. Write how many to complete the equations.



$$\underline{\quad} + 9 = 10$$



$$9 + \underline{\quad} = 10$$



FREE PREVIEW

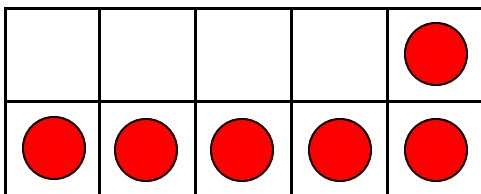
Please Login or Become a Member to download the printable version of this worksheet.



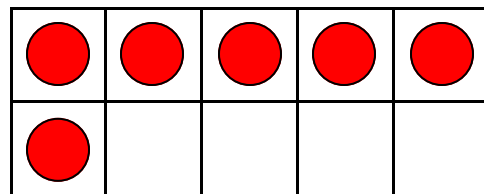
$$\underline{\quad} + 7 = 10$$



$$7 + \underline{\quad} = 10$$



$$\underline{\quad} + 6 = 10$$

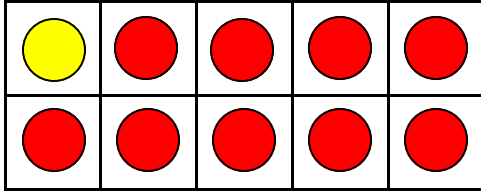


$$6 + \underline{\quad} = 10$$

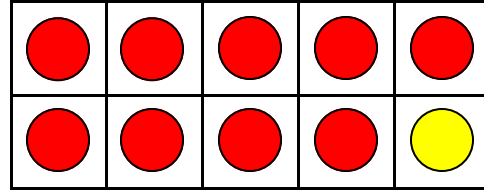
Name _____

Make Ten Using Ten Frames - Opposite Addends #1

Add circles to make ten. Write how many to complete the equations.



$$1 + 9 = 10$$



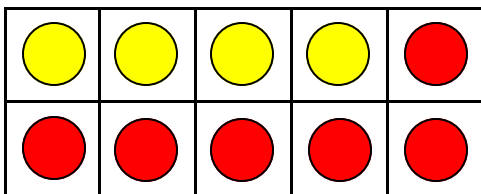
$$9 + 1 = 10$$

**A WELLSPRING**
OF WORKSHEETS**FREE PREVIEW**Please Login or Become a Member to download
the printable version of this worksheet.

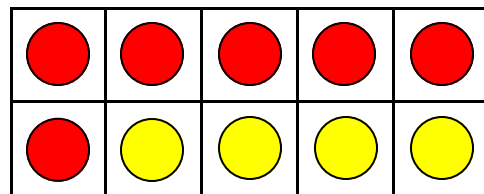
$$3 + 7 = 10$$



$$7 + 3 = 10$$



$$4 + 6 = 10$$



$$6 + 4 = 10$$