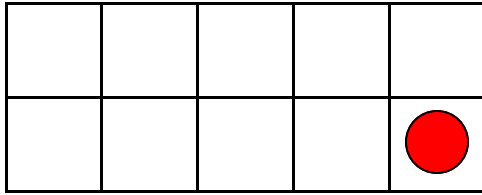
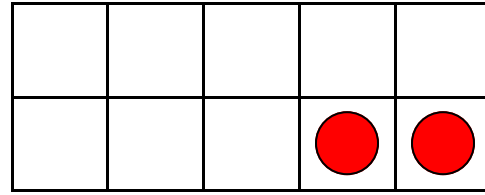


**Make Ten Using Ten Frames - First Addends**

Add circles to make ten. Write how many to complete the equations.



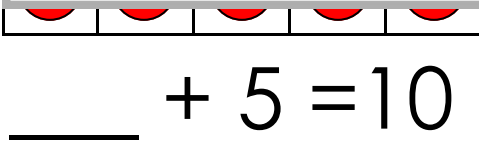
$$\underline{\quad} + 1 = 10$$



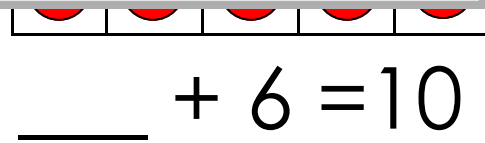
$$\underline{\quad} + 2 = 10$$

**FREE PREVIEW**

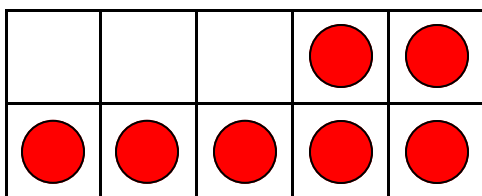
Please Login or Become a Member to download the printable version of this worksheet.



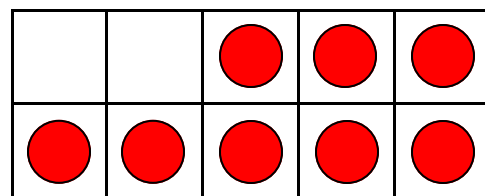
$$\underline{\quad} + 5 = 10$$



$$\underline{\quad} + 6 = 10$$



$$\underline{\quad} + 7 = 10$$

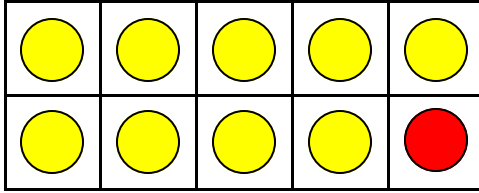


$$\underline{\quad} + 8 = 10$$

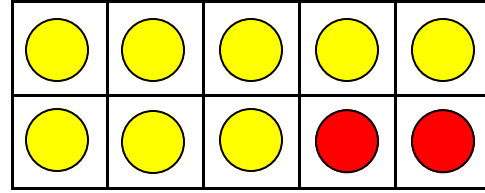
Name \_\_\_\_\_

**Make Ten Using Ten Frames - First Addends**

Add circles to make ten. Write how many to complete the equations.



$$9 + 1 = 10$$

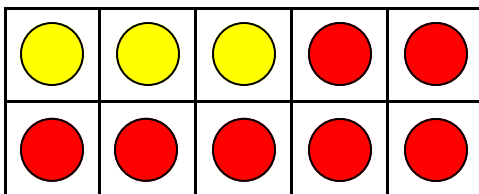


$$8 + 2 = 10$$

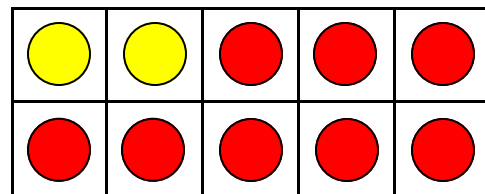
**FREE PREVIEW****Please Login or Become a Member to download  
the printable version of this worksheet.**


$$5 + 5 = 10$$


$$4 + 6 = 10$$



$$3 + 7 = 10$$



$$2 + 8 = 10$$