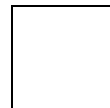


Name _____

Fractions with Pattern Blocks - Squares

Using pattern blocks, solve the problems below.



How many squares make one whole rectangle? _____

Draw the fractional parts.

Each square is $\frac{\quad}{\quad}$ of the whole rectangle.


How many squares make one whole rectangle? _____

Draw the fractional parts.

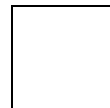
Each square is $\frac{\quad}{\quad}$ of the whole large rectangle.**A WELLSPRING**
OF WORKSHEETS**FREE PREVIEW****Please Login or Become a Member to download the printable version of this worksheet.**

How many squares make one large rectangle? _____


Draw the fractional parts.

Each square is $\frac{\quad}{\quad}$ of the whole large rectangle.

Name _____

Fractions with Pattern Blocks - Squares
Answer Sheet


Using pattern blocks, solve the problems below.

 How many squares make one whole rectangle? 2


Draw the fractional parts.

 Each square is $\frac{1}{2}$ of the whole rectangle.

How many squares make one whole rectangle?

Draw the fractional parts.

 Each square is $\frac{1}{6}$ of the whole large rectangle.

FREE PREVIEW
Please Login or Become a Member to download the printable version of this worksheet.

 How many squares make one large rectangle? 6

Draw the fractional parts.

 Each square is $\frac{1}{6}$ of the whole large rectangle.
