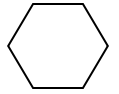
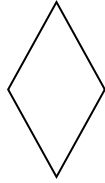


Name _____

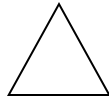
Fractions with Pattern Blocks - Hexagons



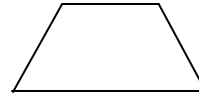
Using pattern blocks, solve the problems below.



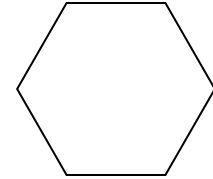
rhombus



triangle



trapezoid



hexagon

How many rhombi make one whole hexagon?

Draw the

Each rhombus



A WELLSPRING
OF WORKSHEETS

FREE PREVIEW

Please Login or Become a Member to download the printable version of this worksheet.

How many triangles make one whole hexagon?

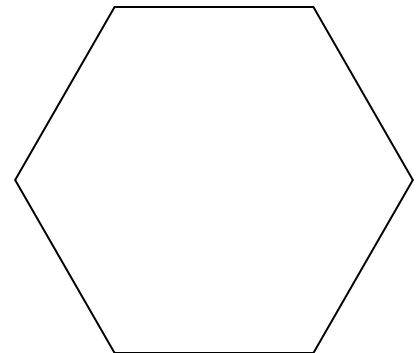
Draw the

Each triangle is $\frac{1}{6}$ of the whole hexagon.

How many trapezoids make one whole hexagon? _____

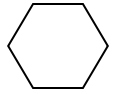
Draw the fractional parts.

Each trapezoid is $\frac{1}{3}$ of the whole hexagon.

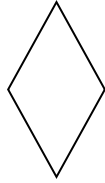


Fractions with Pattern Blocks - Hexagons

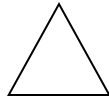
Answer Sheet



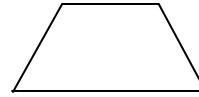
Using pattern blocks, solve the problems below.



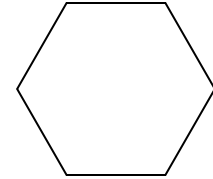
rhombus



triangle



trapezoid

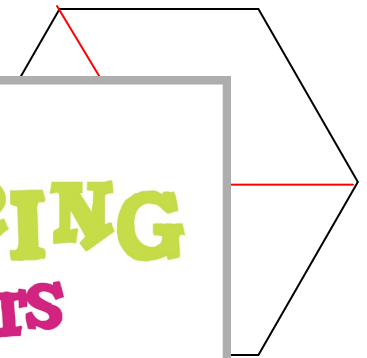


hexagon

How many rhombi make one whole hexagon?

Draw the fractional parts.

Each rhombus is $\frac{1}{2}$ of the whole hexagon.



How many triangles make one whole hexagon?

Draw the fractional parts.

Each triangle is $\frac{1}{6}$ of the whole hexagon.



How many trapezoids make one whole hexagon? 2

Draw the fractional parts. **Any ONE of these lines is a correct answer.**

Each trapezoid is $\frac{1}{2}$ of the whole hexagon.

