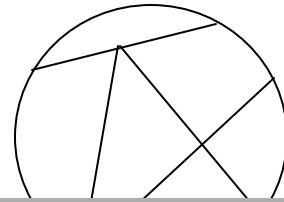
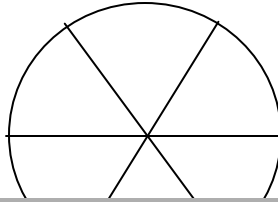
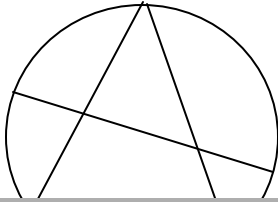


Circle Fractions - How to Create Equal Parts - One Sixth $\frac{1}{6}$

The fractions of a circle must be the same size and same shape. The circles below should be partitioned into sixths. Put an X on the circles that are not partitioned into the same sizes and the same shapes. Color the circle with six equal parts.



Wh
str
da
ce
pa






A WELLSPRING
OF WORKSHEETS

FREE PREVIEW

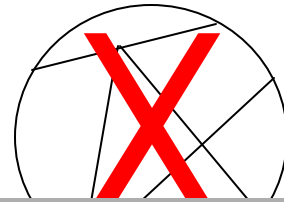
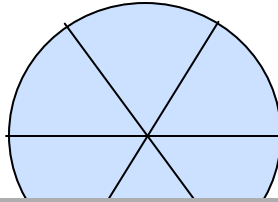
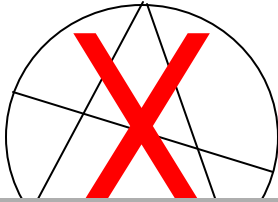
**Please Login or Become a Member to download
the printable version of this worksheet.**

In the circles below draw your own center dot. Practice partitioning each circle into six equal parts. Use a ruler to draw straight lines.



Circle Fractions - How to Create Equal Parts - One Sixth $\frac{1}{6}$

The fractions of a circle must be the same size and same shape. The circles below should be partitioned into sixths. Put an X on the circles that are not partitioned into the same sizes and the same shapes. Color the circle with six equal parts.



Wh
str
da
ce
pa

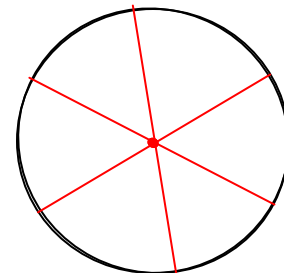
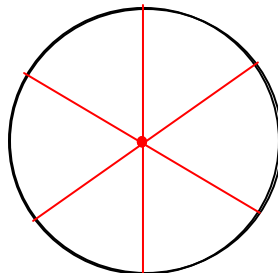
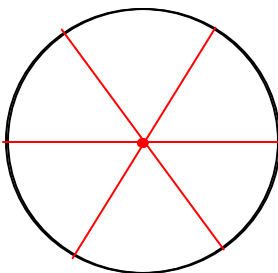


A WELLSPRING
OF WORKSHEETS

FREE PREVIEW

**Please Login or Become a Member to download
the printable version of this worksheet.**

In the circles below draw your own center dot. Practice partitioning each circle into six equal parts. Use a ruler to draw straight lines.



Drawings will vary.