








Making 10 Using Tally Marks - More Practice









Add the number of tally marks needed to make 10. Write the number to complete the equation.

 $4 + \underline{\quad} = 10$	 $5 + \underline{\quad} = 10$
 A WELLSPRING OF WORKSHEETS FREE PREVIEW Please Login or Become a Member to download the printable version of this worksheet.	
 $1 + \underline{\quad} = 10$	 $\underline{\quad} + 6 = 10$
 $9 + \underline{\quad} = 10$	 $3 + \underline{\quad} = 10$

Making 10 Using Tally Marks - More Practice



Add the number of tally marks needed to make 10. Write the number to complete the equation.

 <p>$4 + 6 = 10$</p>	 <p>$5 + 5 = 10$</p>
 <p>A WELLSPRING OF WORKSHEETS</p> <p>FREE PREVIEW</p> <p>Please Login or Become a Member to download the printable version of this worksheet.</p>	
 <p>$1 + 9 = 10$</p>	 <p>$4 + 6 = 10$</p>
 <p>$9 + 1 = 10$</p>	 <p>$3 + 7 = 10$</p>