








**Making 10 Using Tally Marks - First Addend**










Add the number of tally marks needed to make 10. Write the number to complete the equation.

 _____ + 5 = 10	 _____ + 1 = 10
 <p><b>A WELLSPRING</b> OF WORKSHEETS</p> <p><b>FREE PREVIEW</b></p> <p>Please Login or Become a Member to download the printable version of this worksheet.</p>	
 _____ + 4 = 10	 _____ + 9 = 10
 _____ + 3 = 10	 _____ + 2 = 10

**Making 10 Using Tally Marks - First Addend**



Add the number of tally marks needed to make 10. Write the number to complete the equation.

 <p>5 + 5 = 10</p>	 <p>5 + 5 = 10</p>
 <p><b>A WELLSPRING</b> OF WORKSHEETS</p> <p><b>FREE PREVIEW</b></p> <p>Please Login or Become a Member to download the printable version of this worksheet.</p>	
 <p>6 + 4 = 10</p>	 <p>1 + 9 = 10</p>
 <p>7 + 3 = 10</p>	 <p>8 + 2 = 10</p>