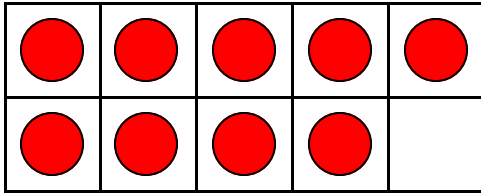
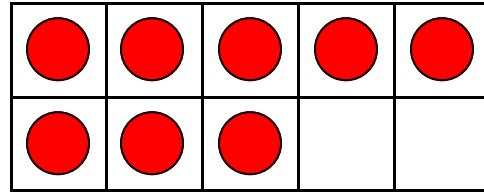


Make Ten Using Ten Frames - Second Addends

Add circles to make ten. Write how many to complete the equations.



$9 + \underline{\quad} = 10$



$8 + \underline{\quad} = 10$

**A WELLSPRING**
OF WORKSHEETS**FREE PREVIEW**

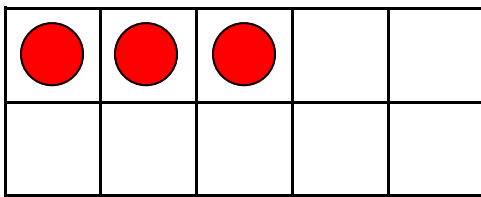
Please Login or Become a Member to download
the printable version of this worksheet.



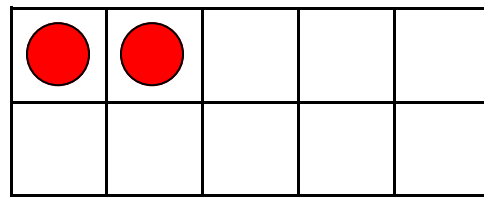
$5 + \underline{\quad} = 10$



$4 + \underline{\quad} = 10$



$3 + \underline{\quad} = 10$

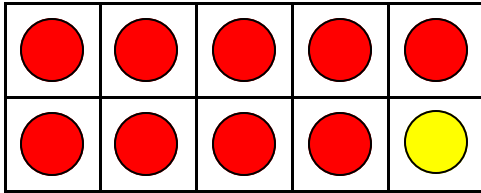


$2 + \underline{\quad} = 10$

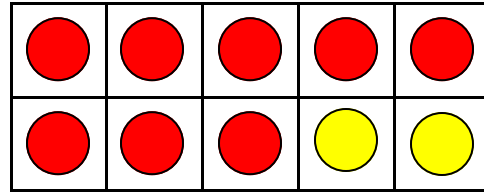
Name _____

Make Ten Using Ten Frames - Second Addends

Add circles to make ten. Write how many to complete the equations.



$$9 + 1 = 10$$

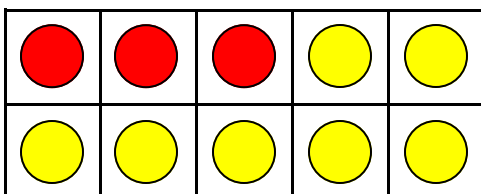


$$8 + 2 = 10$$

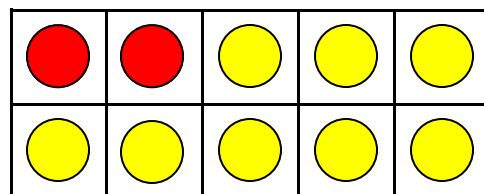
**FREE PREVIEW****Please Login or Become a Member to download the printable version of this worksheet.**


$$5 + 5 = 10$$


$$4 + 6 = 10$$



$$3 + 7 = 10$$



$$2 + 8 = 10$$