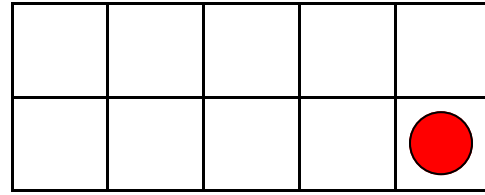


Make Ten Using Ten Frames - Opposite Addends #3

Add circles to make ten. Write how many to complete the equations.



$1 + \underline{\quad} = 10$



$\underline{\quad} + 1 = 10$


A WELLSPRING
 OF WORKSHEETS

FREE PREVIEW

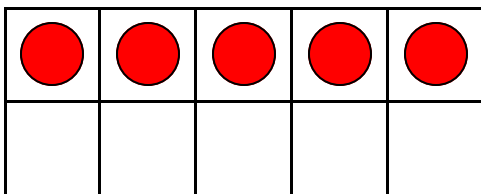
Please Login or Become a Member to download the printable version of this worksheet.



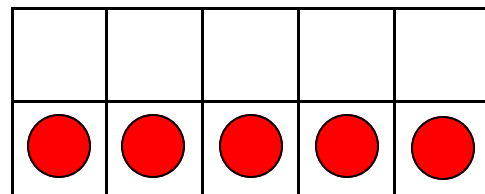
$9 + \underline{\quad} = 10$



$\underline{\quad} + 9 = 10$



$5 + \underline{\quad} = 10$

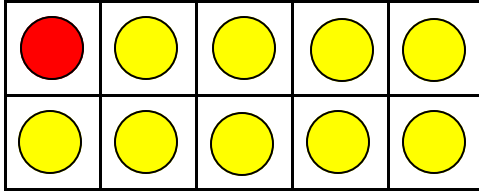


$\underline{\quad} + 5 = 10$

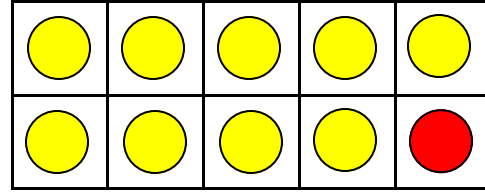
Name _____

Make Ten Using Ten Frames - Opposite Addends #3

Add circles to make ten. Write how many to complete the equations.



$$1 + 9 = 10$$



$$9 + 1 = 10$$


FREE PREVIEW

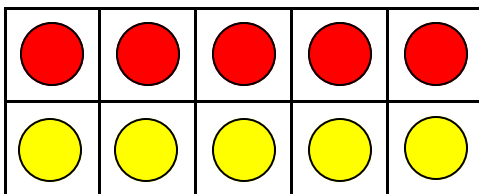
Please Login or Become a Member to download the printable version of this worksheet.



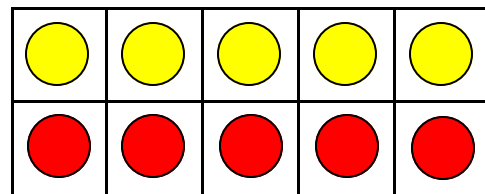
$$9 + 1 = 10$$



$$1 + 9 = 10$$



$$5 + 5 = 10$$



$$5 + 5 = 10$$