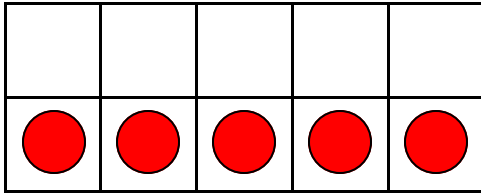
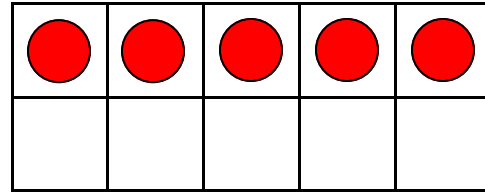


**Make Ten Using Ten Frames - Opposite Addends #2**

Add circles to make ten. Write how many to complete the equations.



$$\underline{\quad} + 5 = 10$$



$$5 + \underline{\quad} = 10$$


**A WELLSPRING**  
 OF WORKSHEETS

**FREE PREVIEW**

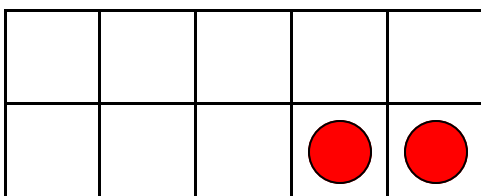
Please Login or Become a Member to download the printable version of this worksheet.



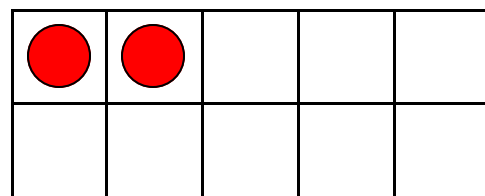
$$\underline{\quad} + 3 = 10$$



$$3 + \underline{\quad} = 10$$



$$\underline{\quad} + 2 = 10$$

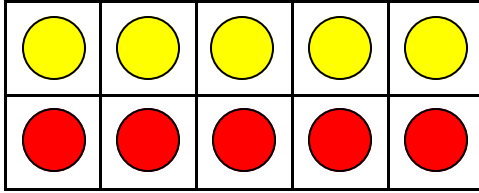


$$2 + \underline{\quad} = 10$$

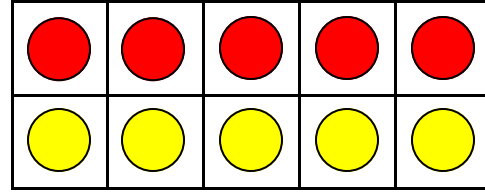
Name \_\_\_\_\_

**Make Ten Using Ten Frames - Opposite Addends #2**

Add circles to make ten. Write how many to complete the equations.



$$5 + 5 = 10$$



$$5 + 5 = 10$$


**FREE PREVIEW**

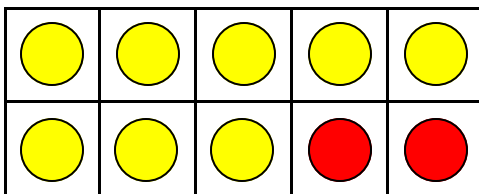
Please Login or Become a Member to download the printable version of this worksheet.



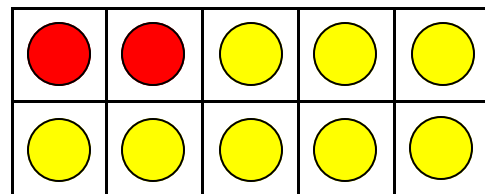
$$7 + 3 = 10$$



$$3 + 7 = 10$$



$$8 + 2 = 10$$



$$2 + 8 = 10$$