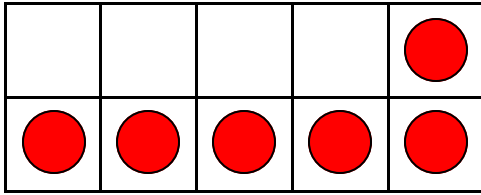
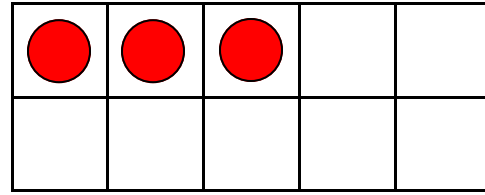


Make Ten Using Ten Frames - Both Addends

Add circles to make ten. Write how many to complete the equations.



$$\underline{\quad} + 6 = 10$$



$$3 + \underline{\quad} = 10$$



FREE PREVIEW

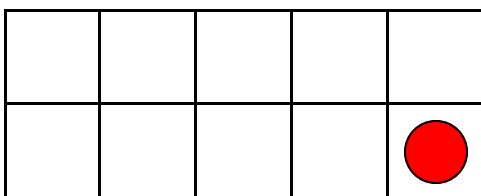
Please Login or Become a Member to download the printable version of this worksheet.



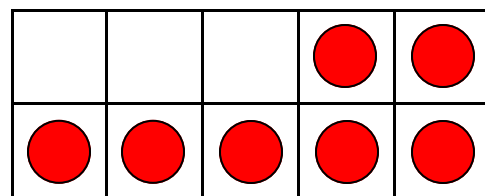
$$4 + \underline{\quad} = 10$$



$$8 + \underline{\quad} = 10$$



$$\underline{\quad} + 1 = 10$$

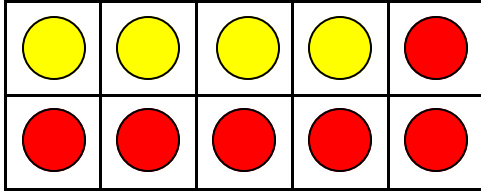


$$\underline{\quad} + 7 = 10$$

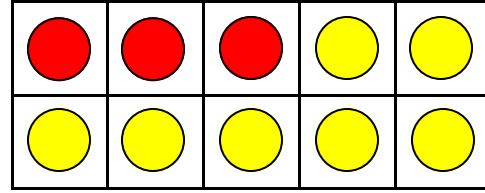
Name _____

Make Ten Using Ten Frames - Both Addends

Add circles to make ten. Write how many to complete the equations.



$$4 + 6 = 10$$



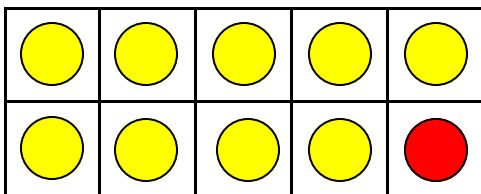
$$3 + 7 = 10$$


FREE PREVIEW

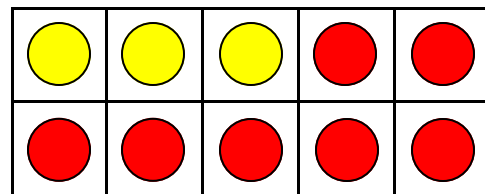
Please Login or Become a Member to download the printable version of this worksheet.

$$4 + 6 = 10$$

$$8 + 2 = 10$$



$$9 + 1 = 10$$



$$3 + 7 = 10$$