
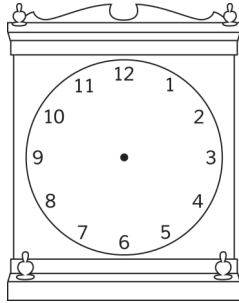


Draw the Time to the Half Hour #3 - 16 Table Clocks

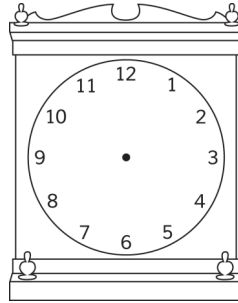
Draw the times on the clock faces.




12:30



11:30



10:30



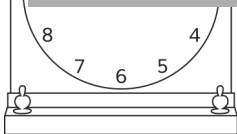
9:30



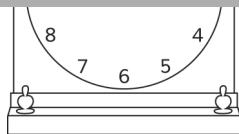
A WELLSPRING
OF WORKSHEETS

FREE PREVIEW

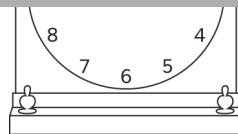
**Please Login or Become a Member to download
the printable version of this worksheet.**



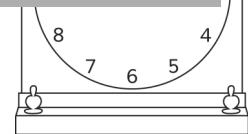
8:30




7:30




6:30



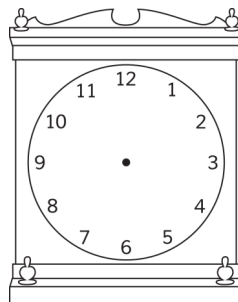
5:30




6:30



7:30



8:30




9:30


Draw the Time to the Half Hour #3 - 16 Table Clocks

Draw the times on the clock faces.


Answer Sheet




12:30



11:30



10:30



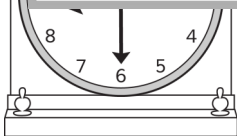
9:30




A WELLSPRING
OF WORKSHEETS

FREE PREVIEW


Please Login or Become a Member to download the printable version of this worksheet.




8:30




7:30




6:30




5:30




6:30



7:30



8:30



9:30