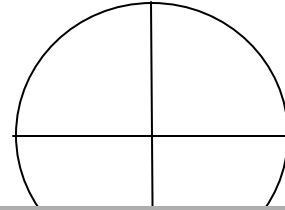
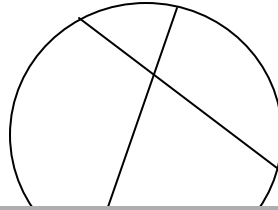
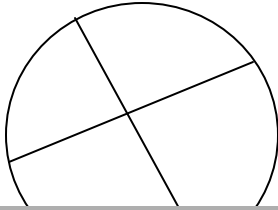


## Circle Fractions - How to Create Equal Parts - One Fourth $\frac{1}{4}$

The fractions of a circle must be the same size and same shape. The circles below should be partitioned into fourths. Put an X on the circles that are not partitioned into the same sizes and the same shapes. Color the circle with four equal parts.



Wh  
stro  
cer  
The  
Tra






**A WELLSPRING**  
OF WORKSHEETS

s.  
.

**FREE PREVIEW**

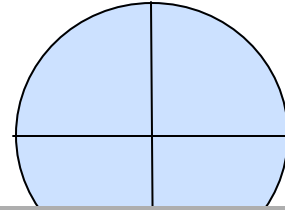
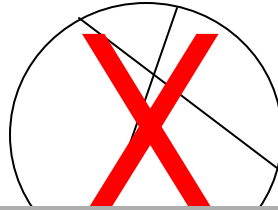
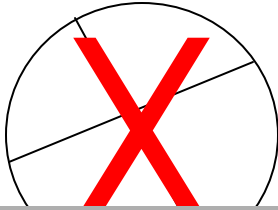
**Please Login or Become a Member to download  
the printable version of this worksheet.**

In the circles below draw your own center dot. Practice partitioning each circle into four equal parts. Use a ruler to draw straight lines.



**Circle Fractions - How to Create Equal Parts - One Fourth  $\frac{1}{4}$** 

The fractions of a circle must be the same size and same shape. The circles below should be partitioned into fourths. Put an X on the circles that are not partitioned into the same sizes and the same shapes. Color the circle with four equal parts.



Wh  
str  
ce  
The  
Tra

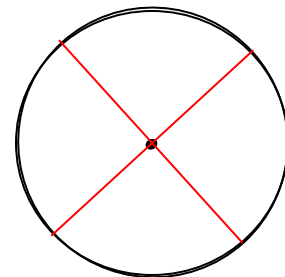
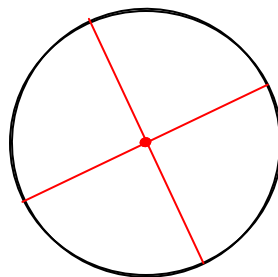
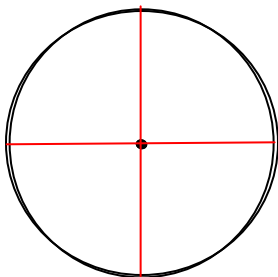


**A WELLSPRING**  
OF WORKSHEETS

**FREE PREVIEW**

**Please Login or Become a Member to download  
the printable version of this worksheet.**

In the circles below draw your own center dot. Practice partitioning each circle into four equal parts. Use a ruler to draw straight lines.



**Drawings will vary.**