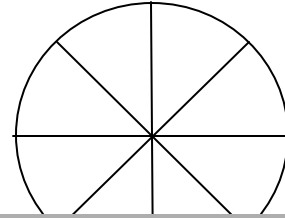
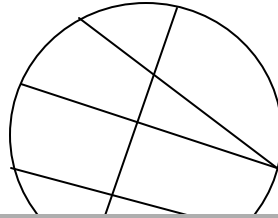
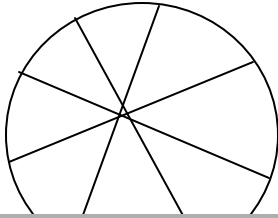


**Circle Fractions - How to Create Equal Parts - One Eighth  $\frac{1}{8}$** 

The fractions of a circle must be the same size and same shape. The circles below should be partitioned into eighths. Put an X on the circles that are not partitioned into the same sizes and the same shapes. Color the circle with eight equal parts.






Wh  
str  
da  
eig  
qu



# FREE PREVIEW

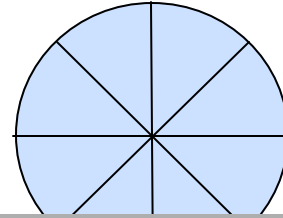
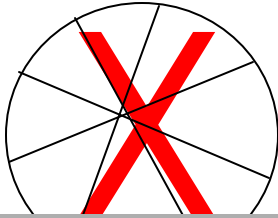
**Please Login or Become a Member to download  
the printable version of this worksheet.**

In the circles below draw your own center dot. Practice partitioning each circle into eight equal parts. Use a ruler to draw straight lines.



**Circle Fractions - How to Create Equal Parts - One Eighth  $\frac{1}{8}$** 

The fractions of a circle must be the same size and same shape. The circles below should be partitioned into eighths. Put an X on the circles that are not partitioned into the same sizes and the same shapes. Color the circle with eight equal parts.



Wh  
str  
da  
eig  
qu

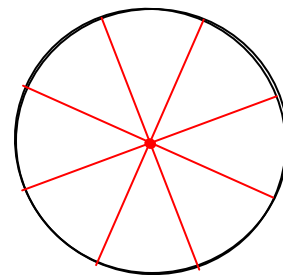
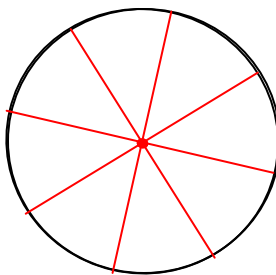
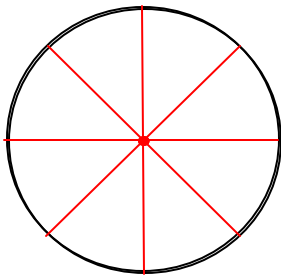


**A WELLSPRING**  
OF WORKSHEETS

**FREE PREVIEW**

**Please Login or Become a Member to download  
the printable version of this worksheet.**

In the circles below draw your own center dot. Practice partitioning each circle into eight equal parts. Use a ruler to draw straight lines.



**Drawings will vary.**